




EVDE ÇALIŞIYORUM
MATEMATİK


Toplama işlemlerini yapalım, sonucu aynı çıkan yuvaları kuşlarla aynı renkte boyayalım.






$$\begin{array}{r} 7 \\ + 2 \\ \hline \end{array}$$



$$\begin{array}{r} 6 \\ + 5 \\ \hline \end{array}$$






$$\begin{array}{r} 9 \\ + 3 \\ \hline \end{array}$$



$$\begin{array}{r} 5 \\ + 5 \\ \hline \end{array}$$







$$\begin{array}{r} 8 \\ + 5 \\ \hline \end{array}$$



$$\begin{array}{r} 4 \\ + 3 \\ \hline \end{array}$$






$$\begin{array}{r} 6 \\ + 2 \\ \hline \end{array}$$

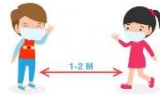

$$\begin{array}{r} 8 \\ + 7 \\ \hline \end{array}$$




$$\begin{array}{r} 7 \\ + 9 \\ \hline \end{array}$$



$$\begin{array}{r} 8 \\ + 6 \\ \hline \end{array}$$






Toplama işlemlerini inceleyelim. Sonuç doğru ise **elmayı**, yanlış ise **armutu** boyayalım.


$$\begin{array}{r} 5 \\ +2 \\ \hline 7 \end{array}$$




$$\begin{array}{r} 8 \\ +2 \\ \hline 9 \end{array}$$




$$\begin{array}{r} 2 \\ +4 \\ \hline 5 \end{array}$$




$$\begin{array}{r} 3 \\ +5 \\ \hline 8 \end{array}$$




$$\begin{array}{r} 6 \\ +4 \\ \hline 10 \end{array}$$




$$\begin{array}{r} 9 \\ +3 \\ \hline 12 \end{array}$$




$$\begin{array}{r} 4 \\ +4 \\ \hline 9 \end{array}$$




$$\begin{array}{r} 7 \\ +6 \\ \hline 13 \end{array}$$

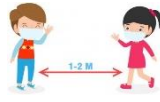


$$\begin{array}{r} 8 \\ +3 \\ \hline 11 \end{array}$$



$$\begin{array}{r} 2 \\ +3 \\ \hline 6 \end{array}$$





Aşağıdaki toplama işlemlerini yapalım.

9 = 2 =

9 + 4 =

9 = 3 =

8 = 3 =

8 + 5 =

8 = 6 =

7 = 2 =

7 + 4 =

7 = 5 =

6 = 1 =

6 + 3 =

6 = 5 =

5 = 4 =

5 + 2 =

5 = 6 =

4 = 3 =

4 + 6 =

4 = 7 =

3 = 8 =

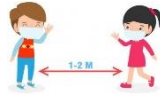
3 + 7 =

3 = 9 =

2 = 5 =

2 + 1 =

2 = 9 =



EVDE ÇALIŞIYORUM
MATEMATİK

Aşağıdaki ifadelerin toplama işlemlerini yazalım.

Altı artı iki sekiz eder.

$$\boxed{6} + \boxed{2} = \boxed{8}$$

Yedi artı dört on bir eder.

$$\boxed{} + \boxed{} = \boxed{}$$

Altı artı altı on iki eder.

$$\boxed{} + \boxed{} = \boxed{}$$

Sekiz artı dokuz on yedi eder.

$$\boxed{} + \boxed{} = \boxed{}$$

On iki artı iki on dört eder.

$$\boxed{} + \boxed{} = \boxed{}$$

On bir artı altı on yedi eder.

$$\boxed{} + \boxed{} = \boxed{}$$

Dokuz artı yedi on altı eder.

$$\boxed{} + \boxed{} = \boxed{}$$